






Equations 1

1.  +  +  = 30



 +  = 15

 +  = 12

 +  +  =

2.  +  +  = 20

 +  = 14

 +  = 19

 +  +  =

3.  +  = 12

 +  = 17

 -  = 3

 +  =